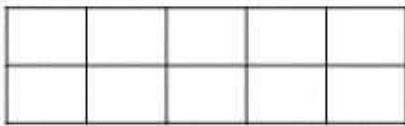



# Addition to 10

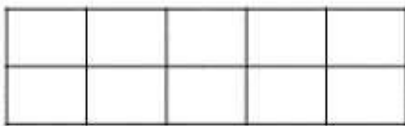
Draw counters on the ten frames to help you solve the calculations.



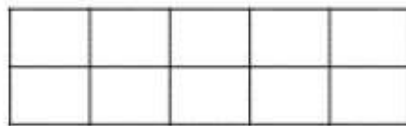
$3 + 4 =$



$7 + 2 =$



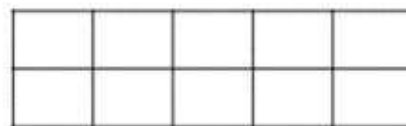
$5 + 5 =$



$1 + 9 =$



$2 + 6 =$



$8 + 0 =$

Count, write and add the fingers.



$\square + \square = \square$



$\square + \square = \square$



$\square + \square = \square$



$\square + \square = \square$



$\square + \square = \square$



$\square + \square = \square$