


















ADDITION PROBLEMS WITHIN 100 SHEET 3A
















Work out these addition word problems with no regrouping.

		WORKING OUT
1)	<p>There are 31  in a flock.</p> <p>Another 36  come and join them.</p> <p>How many  in all? _____</p>	
2)	<p>There are 62  in an airport.</p> <p>24 more  come and land.</p> <p>How many  in the airport now? _____</p>	
3)	<p>Tyger collects 51  in the morning.</p> <p>He collects 23 more  in the afternoon.</p> <p>How many  altogether? _____</p>	
4)	<p>There are 73  in a meadow.</p> <p>Another 25  fly into the meadow.</p> <p>How many  in total? _____</p>	
5)	<p>There are 54  on a pear tree.</p> <p>There are 35 more  on the ground.</p> <p>How many  in total? _____</p>	



ADDITION PROBLEMS WITHIN 100 SHEET 3A ANSWERS

Work out these addition word problems with no regrouping.

		WORKING OUT
1)	<p>There are 31  in a flock.</p> <p>Another 36  come and join them.</p> <p>How many  in all? <u>67</u></p>	
2)	<p>There are 62  in an airport.</p> <p>24 more  come and land.</p> <p>How many  in the airport now? <u>86</u></p>	
3)	<p>Tyger collects 51  in the morning.</p> <p>He collects 23 more  in the afternoon.</p> <p>How many  altogether? <u>74</u></p>	
4)	<p>There are 73  in a meadow.</p> <p>Another 25  fly into the meadow.</p> <p>How many  in total? <u>98</u></p>	
5)	<p>There are 54  on a pear tree.</p> <p>There are 35 more  on the ground.</p> <p>How many  in total? <u>89</u></p>	