


















SUBTRACTION PROBLEMS UP TO 100 SHEET 1A

Work out these subtraction word problems with no regrouping.

		WORKING OUT
1)	<p>Newton catches 25  in a lake.</p> <p>He puts 13  back.</p> <p>How many  does he have now? _____</p>	
2)	<p>There are 39  in a tree.</p> <p>A loud noise scares 16  away.</p> <p>How many  are left in the tree? _____</p>	
3)	<p>Tyger has 46  .</p> <p>Sally has 21  .</p> <p>How many more  does Tyger have? _____</p>	
4)	<p>There are 47  in a parking lot.</p> <p>32 of the  drive away.</p> <p>How many  are left? _____</p>	
5)	<p>There are 37  for sale in a pet shop.</p> <p>25  get sold.</p> <p>How many  are left in the shop? _____</p>	