


















SUBTRACTION PROBLEMS UP TO 100 SHEET 2A

Work out these subtraction word problems with no regrouping.

		WORKING OUT
1)	<p>There are 44  .</p> <p>13 of the  burst.</p> <p>How many  are left? _____</p>	
2)	<p>Sally has 46  .</p> <p>She uses 22  to make some juice.</p> <p>How many  does she have left? _____</p>	
3)	<p>There are 67  .</p> <p>33  are cut down.</p> <p>How many  are left? _____</p>	
4)	<p>There are 75  on the beach.</p> <p>The sea washes away 24  .</p> <p>How many  are there now? _____</p>	
5)	<p>Tyger catches 49  .</p> <p>Newton catches 33  .</p> <p>How many more  did Tyger catch? _____</p>	