















SUBTRACTION PROBLEMS UP TO 100 SHEET 3A

Work out these subtraction word problems with no regrouping.

		WORKING OUT
1)	<p>Sally has 68  in a bookcase.</p> <p>She lends 24  to Newton.</p> <p>How many  does she have left? _____</p>	
2)	<p>A pie shop has 56  .</p> <p>The shop sells 45  .</p> <p>How many  are there now? _____</p>	
3)	<p>On a fishing trip, Quadra catches 78  .</p> <p>Frazer catches 55  .</p> <p>How many more did Quadra catch? _____</p>	
4)	<p>There are 78  in Sally's pencil case.</p> <p>She loses 24  .</p> <p>How many does she have left? _____</p>	
5)	<p>Captain sees 97  sailing on the lake.</p> <p>The next day he sees 65  on the lake.</p> <p>What is the difference? _____</p>	