




Name \_\_\_\_\_

Date \_\_\_\_\_







## SUBTRACTION PROBLEMS UP TO 100 SHEET 5A

Sally sells apples, oranges and bananas in her fruit stall. This table shows how many of each fruit she sold for the first 3 days of the week.

			
Monday	38	97	74
Tuesday	25	43	89
Wednesday	59	64	47

Use the table above to answer the questions (no regrouping needed).

		WORKING OUT
1)	How many more  did Sally sell on Wednesday than Monday? Answer _____	
2)	How many more  did Sally sell on Monday than Tuesday? Answer _____	
3)	How many fewer  did Sally sell on Wednesday than Tuesday? Answer _____	
4)	What is the difference in the number of  sold on Monday and Wednesday? Answer _____	