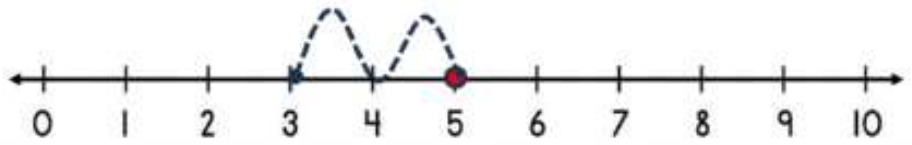


SUBTRACTING ON A NUMBER LINE WITHIN 10 SHEET 1

Jump back along the number line to find the answer.

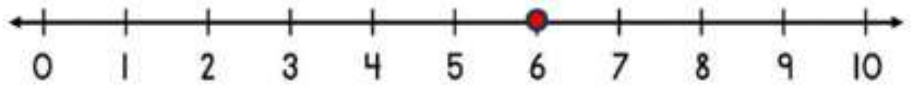
1) $5 - 2 = \underline{\quad}$



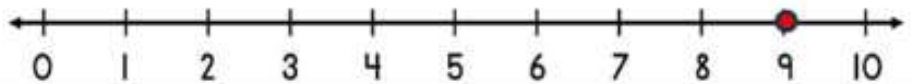
2) $7 - 1 = \underline{\quad}$



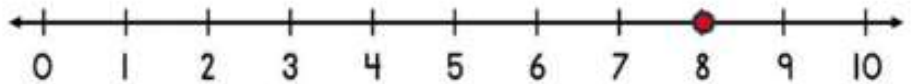
3) $6 - 3 = \underline{\quad}$



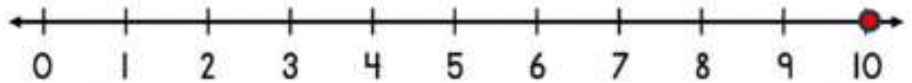
4) $9 - 2 = \underline{\quad}$



5) $8 - 4 = \underline{\quad}$



6) $10 - 3 = \underline{\quad}$



7) $8 - 2 = \underline{\quad}$



8) $4 - 4 = \underline{\quad}$

