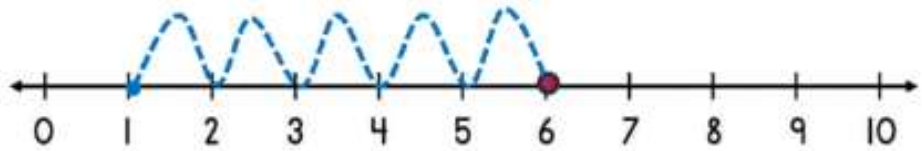


# SUBTRACTING ON A NUMBER LINE WITHIN 10 SHEET 3




*Jump back along the number line to find the answer.*

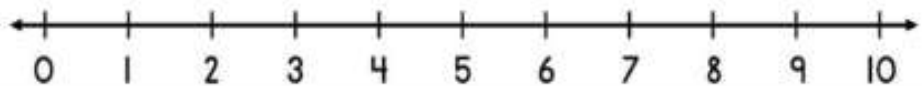
1)  $6 - 5 =$  \_\_\_\_\_



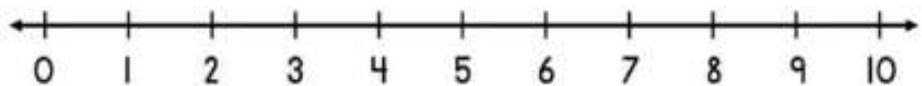
2)  $10 - 4 =$  \_\_\_\_\_



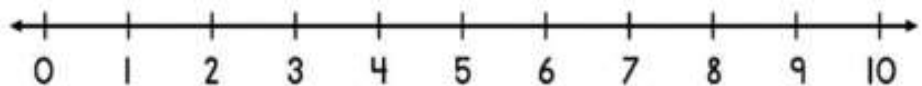
3)  $8 - 3 =$  \_\_\_\_\_



4)  $9 - 6 =$  \_\_\_\_\_



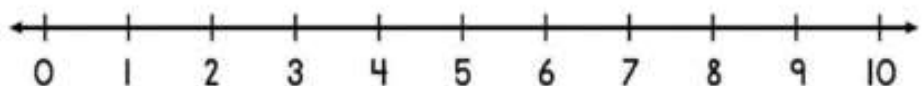
5)  $2 - 2 =$  \_\_\_\_\_



6)  $10 - 7 =$  \_\_\_\_\_



7)  $9 - 4 =$  \_\_\_\_\_



8)  $8 - 6 =$  \_\_\_\_\_

