







Name: \_\_\_\_\_

# Zoo Animals

Directions: Write each total to complete the tally chart below. Then answer the questions.



Animals at the Zoo		Total
 Koala		
 Tiger		
 Monkey		

1. How many tigers are at the zoo? \_\_\_\_\_

2. How many monkeys are at the zoo? \_\_\_\_\_

3. How many koalas are at the zoo? \_\_\_\_\_

4. Which animal has the most number?  
\_\_\_\_\_

5. Which animal has the least number?  
\_\_\_\_\_

6. How many more monkeys are there than tigers?  
\_\_\_\_\_

7. How many koalas and tigers are there altogether?  
\_\_\_\_\_